

SA's Leading Past Year

Exam Paper Portal



You have Downloaded, yet Another Great Resource to assist you with your Studies 😊

Thank You for Supporting SA Exam Papers

Your Leading Past Year Exam Paper Resource Portal

Visit us @ www.saexampapers.co.za



**SA EXAM
PAPERS**
SA EXAM
PAPERS



education

Department of
Education
FREE STATE PROVINCE

PREPARATORY EXAMINATION/ VOORBEREIDENDE EKSAMEN

GRADE/GRAAD 12

MATHEMATICS P2/ WISKUNDE V2

SEPTEMBER 2024

MARKS/PUNTE: 150

MARKING GUIDELINES/ NASIENRIGLYNE

These marking guidelines consist of 22 pages./
Hierdie nasienriglyne bestaan uit 22 bladsye.

NOTE:

- If a candidate answers a question TWICE, only mark the FIRST attempt.
- If a candidate has crossed out an attempt of a question and not redone the question, mark the crossed-out version.
- Consistent accuracy applies in ALL aspects of the marking memorandum. Stop marking the second calculation error.
- Assuming answers/values in order to solve a problem is NOT acceptable.

NOTA:

- *As 'n kandidaat 'n vraag TWEE KEER beantwoord, merk slegs die EERSTE poging.*
- *As 'n kandidaat 'n antwoord van 'n vraag doodtrek en nie oordoen nie, merk die doodgetrekte poging.*
- *Volgehoue akkuraatheid word in ALLE aspekte van die nasienriglyne toegepas. Hou op nasien by die tweede berekeningsfout.*
- *Aanvaar van antwoorde/waardes om 'n probleem op te los, word NIE toegelaat nie.*



QUESTION/VRAAG 1

1.1	Number of litres used	Frequency (f)	Midpoint of interval (x)	Cumulative frequency	f.(x)
	$50 \leq x < 100$	20	75	20	1500
	$100 \leq x < 150$	30	125	50	3750
	$150 \leq x < 200$	50	175	100	8750
	$200 \leq x < 250$	100	225	200	22500
	$250 \leq x < 300$	80	275	280	22000
	$300 \leq x < 350$	70	325	350	22750
	$350 \leq x < 400$	50	375	400	18750
TOTAL					100 000
<ul style="list-style-type: none"> ✓ midpoint of interval column/<i>middelpunt van intervalekolom</i> ✓ cumulative frequency column/<i>kumulatiewe frekwensiekolom</i> ✓ f.(x) column/<i>f.(x) kolom</i> 					
(3)					
1.2	$\bar{x} = \frac{100000}{400}$ $= 250$				<ul style="list-style-type: none"> ✓ substitute/<i>substitusie</i> ✓ answer/<i>antwoord</i>
					(2)
1.3	<p style="text-align: center;">OGIVE</p>				<ul style="list-style-type: none"> ✓ plotting points correctly/<i>stip punte korrek</i> ✓ shape/<i>vorm</i>
					(2)
1.4	Median = 250				<ul style="list-style-type: none"> ✓ accept/<i>aanvaar</i> (249–251)
					(1)
1.5	Symmetrical. Mean = Median/ <i>Simmetries. Gemiddeldeld =Mediaan</i>				<ul style="list-style-type: none"> ✓ answer/<i>antwoord</i> ✓ reason/<i>rede</i>
					(2)



1.6	Standard deviation will increase/ <i>Standaard afwyking sal toeneem</i> The values will be further from the new mean./ <i>Die waardes sal verder wees vanaf die nuwe gemiddelde.</i>	✓ increase/ <i>vermeerder</i> ✓ reason/ <i>rede</i>
		(2)
		[12]

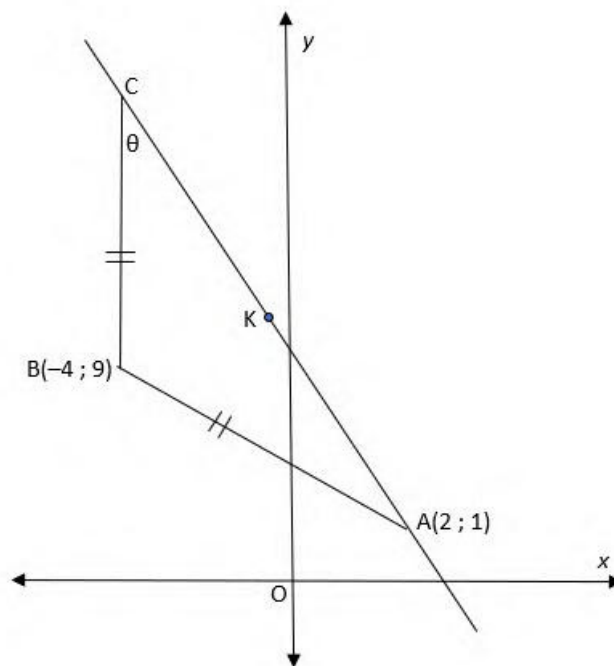
QUESTION/VRAAG 2

Number of leg presses done per day (x)	36	136	51	126	90	43	77	68	103	124
Strength of upper leg (y)	0,2	0,85	0,35	0,91	0,73	0,34	0,61	0,59	0,78	0,90

2.1	$a = 0,0478072\dots$ $b = 0,0067704\dots$ $\hat{y} = 0,05 + 0,01x$	Answer only: full marks, but if a and b are swapped only 1/3 marks/ <i>Slegs antwoord : volpunte, maar as a en b omgeruil is, slegs 1/3</i>	✓ a ✓ b ✓ equation/ <i>vergelyking</i>
2.2	$\hat{y} = 0,0478072 + 0,0067704(110)$ $= 0,79255196$ $= 0,79$ OR $\hat{y} = 0,05 + 0,01(110)$ $= 1,15$	Answer only: full marks/ <i>Slegs antwoord : volpunte</i> Accept 1,15/ <i>Aanvaar 1,15</i>	✓ substitute 110 into eq./ <i>vervang 110 in vgl.</i> ✓ answer/ <i>antwoord</i>
2.3	No. This is extrapolation./ <i>Nee. Dit is ekstrapolasie.</i>		✓ answer/ <i>antwoord</i> ✓ reason/ <i>rede</i>
2.4	$r = 0,97$	No penalty for rounding/ <i>Geen penalisasie vir afronding</i>	✓ ✓ $r = 0,97$
2.5	There is a positive strong correlation between the number of leg presses and leg strength of an eighteen-year-old boy./ <i>Daar is 'n positief sterk korrelasie tussen beendrukke en beenkrag van 'n agtienjarige seun.</i>		✓ positive/ <i>positief</i> ✓ strong/ <i>sterk</i>
			[11]




QUESTION/VRAAG 3

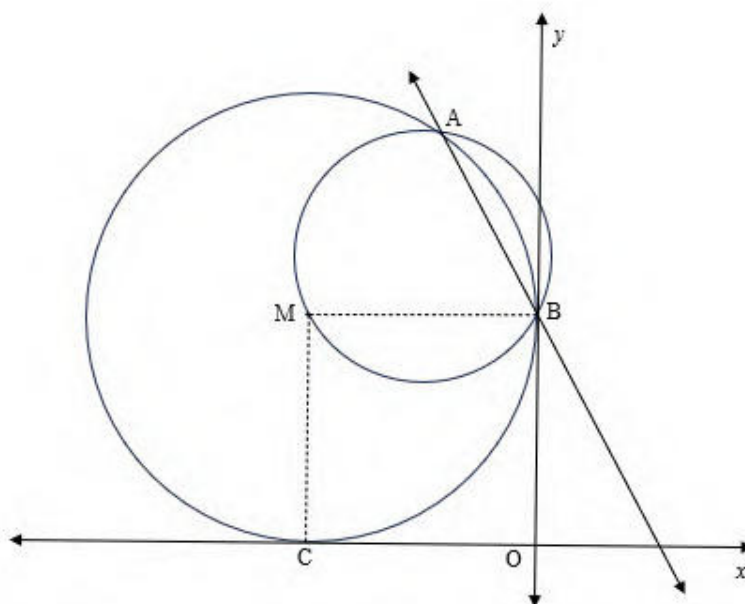


3.1	$AB = \sqrt{(2 + 4)^2 + (1 - 9)^2}$ $= \sqrt{100}$ $= 10$	✓ subst./vervang ✓ answer/antwoord (2)
3.2	$AB = BC = 10$ $y\text{-value } 9 + 10$ $C(-4; 19)$	<div style="border: 1px solid black; padding: 5px; display: inline-block;"> Answer only: full marks/ <i>Slegs antwoord: volpunte</i> </div> ✓ $x = -4$ ✓ $y = 19$ (2)
3.3	$K = \left(\frac{2 + (-4)}{2}; \frac{1 + 19}{2} \right)$ $= (-1; 10)$	<div style="border: 1px solid black; padding: 5px; display: inline-block;"> Answer only: full marks./ <i>Slegs antwoord: volpunte</i> </div> ✓ subst./vervang ✓ answer/antwoord (2)
3.4	$m_{AC} = \frac{19 - 1}{-4 - 2}$ $= \frac{18}{-6}$ $= -3$ <p>through/deur(2; 1) $y - 1 = -3(x - 2)$ $\therefore y = -3x + 7$</p>	✓ $m_{AC} = -3$ ✓ subst./vervang (2; 1) ✓ equation/vergelyking (3)



	<p>OR/OF</p> $m_{AC} = \frac{19 - 1}{-4 - 2}$ $= \frac{18}{-6}$ $= -3$ <p>through/deur(-4; 19) $y - 19 = -3(x - (-4))$ $-19 = -3x - 12$ $\therefore y = -3x + 7$</p>	<p>✓ $m_{AC} = -3$</p> <p>✓ subst./vervang (-4; 19)</p> <p>✓ equation/vergelyking (3)</p>
3.5	<p>$\tan \beta = m_{AC} = -3$ <i>refangle</i> = $71,57^\circ$ $\beta = 108,43^\circ$ $\theta = 90^\circ - 71,57^\circ$ $= 18,43^\circ$</p> <p>OR/OF</p> <p>In a right angled triangle</p> $\tan \theta = \frac{6}{18}$ $\theta = 18,43^\circ$	<p>✓ $\tan \beta = m_{AC} = -3$</p> <p>✓ method/metode ✓ answer/antwoord (3)</p> <p>✓ value of 6 ✓ value of 18 ✓ answer/antwoord (3)</p>
3.6	<p>$AC = 6\sqrt{10}$ $\perp h = \sqrt{10}$ Area $\Delta ABC = \frac{1}{2} \cdot b \cdot \perp h$ $= \frac{1}{2} \cdot 6\sqrt{10} \cdot \sqrt{10}$ $= 30 \text{ units}^2 / \text{eenhede}^2$</p> <p>OR/OF</p> <p>$AC = 6\sqrt{10}$ $BC = 10$ Area $\Delta ABC = \frac{1}{2} \cdot BC \cdot AC \cdot \sin C$ $= \frac{1}{2} \cdot 10 \cdot 6\sqrt{10} \cdot \sin 18,43^\circ$ $= 29,99 \text{ units}^2 / \text{eenhede}^2$</p>	<p>✓ $AC = 6\sqrt{10}$</p> <p>✓ $\perp h = \sqrt{10}$</p> <p>✓ substitution into correct formula/substitusie in korrek formule ✓ answer/antwoord (4)</p> <p>✓ $AC = 6\sqrt{10}$ ✓ $BC = 10$ ✓ substitution into correct formula/substitusie in korrek formule ✓ answer/antwoord (4)</p>
3.7	D (2 ; 11)	<p>✓ x - value/waarde ✓ y - value/waarde (2)</p>
		[18]



QUESTION/VRAAG 4

4.1	$x^2 + x + y^2 - 3y = -2$ $x^2 + x + \left(\frac{1}{2}\right)^2 + y^2 - 3y + \left(\frac{-3}{2}\right)^2$ $= -2 + \frac{1}{4} + \frac{9}{4}$ $\left(x + \frac{1}{2}\right)^2 + \left(y - \frac{3}{2}\right)^2 = \frac{1}{2}$ centre $\left(\frac{-1}{2}; \frac{3}{2}\right)$ radius = $\sqrt{\frac{1}{2}}$	<ul style="list-style-type: none"> ✓ LHS/LK ✓ RHS/RK ✓ centre/middelpunt ✓ radius/radius <p style="text-align: right;">(4)</p>
4.2	$y = -x + 1 \dots (1)$ $x^2 + x + y^2 - 3y + 2 = 0 \dots (2)$ substitute (1) into (2) $x^2 + x + (-x + 1)^2 - 3(-x + 1) + 2 = 0$ $x^2 + x + x^2 - 2x + 1 + 3x - 3 + 2 = 0$ $2x^2 + 2x = 0$ $2x(x + 1) = 0$ $x = 0 \text{ or } x = -1$ $A(-1; 2)$ OR/OF	<ul style="list-style-type: none"> ✓ substitute substitusie ✓ standard form/standard vorm ✓ factors/faktore ✓ value(s) of x/waardes van x ✓ coordinates of A/koördinate van A <p style="text-align: right;">(5)</p>

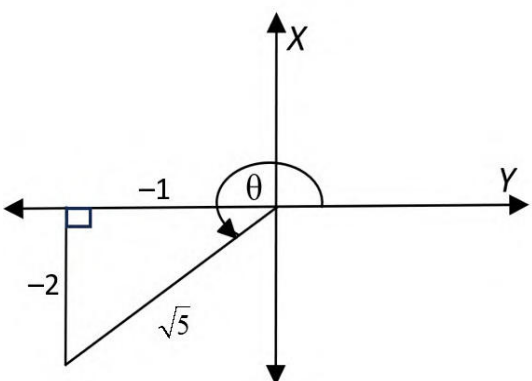


	$x = -y + 1 \dots (1)$ $x^2 + 2x + y^2 - 2y + 1 = 0 \dots (2)$ substitute(1) into (2) $(-y + 1)^2 + 2(-y + 1) + y^2 - 2y + 1 = 0$ $y^2 - 2y + 1 - 2y + 2 + y^2 - 2y + 1 = 0$ $2y^2 - 6y + 4 = 0$ $2(y^2 - 3y + 2) = 0$ $(y - 2)(y - 1) = 0$ $y = 2$ or/of $y = 1$ $A(-1; 2)$	✓ substitute <i>substitusie</i> ✓ standard form/ <i>standaard vorm</i> ✓ factors/ <i>faktore</i> ✓ value(s) of y / <i>waardes van y</i> ✓ coordinates of A / <i>koördinate van A</i> (5)
4.3	y - intercept $x = 0$ y - intercept $x = 0$ $(0)^2 + y^2 + (0) - 3y + 2 = 0$ $y^2 - 3y + 2 = 0$ $(y - 1)(y - 2) = 0$ $y = 2$ or $y = 1$ Centre $M(-1; 1)$ passes through $(0; 1)$ $(x + 1)^2 + (y - 1)^2 = r^2$ substitute $(0; 1)$ $(0 + 1)^2 + (1 - 1)^2 = r^2$ $r^2 = 1$ $(x + 1)^2 + (y - 1)^2 = 1$ $x^2 + 2x + 1 + y^2 - 2y + 1 - 1 = 0$ $x^2 + 2x + y^2 - 2y + 1 = 0$ OR/OF $y = -x + 1$ y - intercept $x = 0$ y - intercept $(0; 1)$ Centre $M(-1; 1)$ passes through $(0; 1)$ $(x + 1)^2 + (y - 1)^2 = r^2$ substitute $(0; 1)$ $(0 + 1)^2 + (1 - 1)^2 = r^2$ $r^2 = 1$ $(x + 1)^2 + (y - 1)^2 = 1$ $x^2 + 2x + 1 + y^2 - 2y + 1 - 1 = 0$ $x^2 + 2x + y^2 - 2y + 1 = 0$	✓ substitute/ <i>substitusie</i> $x = 0$ ✓ factors/ <i>faktore</i> ✓ both y -values/ <i>beide y-waardes</i> ✓ substitute centre M and point/ <i>substitusie in middelpunt M en punt</i> ✓ equation/ <i>vergelyking</i> (5) ✓ substitute/ <i>substitusie</i> $x = 0$ ✓ point / <i>punt</i> $(0; 1)$ ✓ substitute centre M and point/ <i>substitusie van middelpunt M en punt</i> ✓ $r^2 = 1$ ✓ equation/ <i>vergelyking</i> (5)
4.4.1	$y = -x + k \dots (1)$ $x^2 + y^2 + 2x - 2y + 1 = 0 \dots (2)$ substitute(1) into (2) $x^2 + (-x + k)^2 + 2x - 2(-x + k) + 1 = 0$ $x^2 + x^2 - 2kx + k^2 + 2x + 2x - 2k + 1 = 0$ $2x^2 - 2kx + 4x + k^2 - 2k + 1 = 0$ $2x^2 + (4 - 2k)x + (k^2 - 2k + 1) = 0$	✓ substitute/ <i>substitusie</i> ✓ simplify/ <i>vereenvoudig</i> ✓ standard form/ <i>standaard vorm</i> (3)

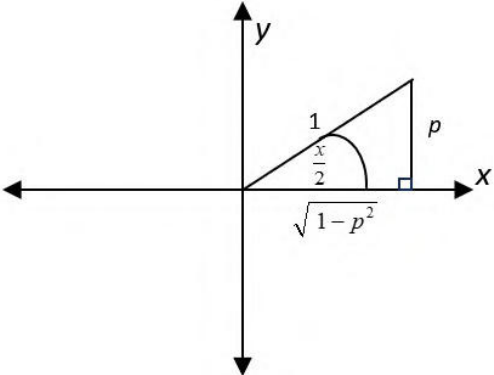
4.4.2	Equal roots $\Delta = 0$ $b^2 - 4ac = 0$ $(4 - 2k)^2 - 4(2)(k^2 - 2k + 1) = 0$ $16 - 16k + 4k^2 - 8k^2 + 16k - 8 = 0$ $-4k^2 + 8 = 0$ $-4k^2 = -8$ $k^2 = 2$ $k = \pm\sqrt{2}$	$\checkmark (4 - 2k)^2 - 4(2)(k^2 - 2k + 1) = 0$ \checkmark simplify/ <i>vereenvoudig</i> \checkmark standard form/ <i>standaard vorm</i> $\checkmark k = \sqrt{2}$ or/of 1,41 $\checkmark k = -\sqrt{2}$ or/of -1,41 (5)
		[22]



QUESTION/VRAAG 5

5.1.1	 $\tan \theta = \frac{-2}{-1}$ $= 2$	<ul style="list-style-type: none"> ✓ $x = -1$ ✓ answer/antwoord (2)
5.1.2	$\cos 2\theta$ $= 2 \cos^2 \theta - 1$ $= 2 \left(\frac{-1}{\sqrt{5}} \right)^2 - 1$ $= \frac{-3}{5}$ <p>OR/OF</p> $1 - 2 \sin^2 \theta$ $= 1 - 2 \left(\frac{-2}{\sqrt{5}} \right)^2$ $= \frac{-3}{5}$ <p>OR/OF</p> $\cos^2 \theta - \sin^2 \theta$ $= \left(\frac{-1}{\sqrt{5}} \right)^2 - \left(\frac{-2}{\sqrt{5}} \right)^2$ $= \frac{-3}{5}$	<ul style="list-style-type: none"> ✓ double angle identity/dubbel hoek identiteit ✓ substitution into correct formula/substitusie in korrekte formule ✓ answer/antwoord (3) ✓ double angle identity/dubbel hoek identiteit ✓ substitution into correct formula/substitusie in korrekte formule ✓ answer/antwoord (3) ✓ double angle identity dubbel hoek identiteit ✓ substitution into correct formula/substitusie in korrekte formule ✓ answer/antwoord (3)



5.2	$2 \cos^2 15^\circ - 1 + \frac{2 \sin 140^\circ}{\cos 310^\circ}$ $= \cos 30^\circ + \frac{(2 \sin 40^\circ)}{(\cos 50^\circ)}$ $= \frac{\sqrt{3}}{2} + \frac{2 \sin 40^\circ}{\sin 40^\circ}$ $= \frac{\sqrt{3} + 4}{2}$	<ul style="list-style-type: none"> ✓ $\cos 30^\circ$ ✓ $\sin 40^\circ$ ✓ $\cos 50^\circ$ ✓ $\sin 40^\circ$ ✓ answer/antwoord <p style="text-align: right;">(5)</p>
5.3	 $\sin x - 1$ $= 2 \sin \frac{x}{2} \cos \frac{x}{2} - 1$ $= 2 \left(\frac{p}{1} \right) \left(\frac{\sqrt{1-p^2}}{1} \right) - 1$ $= 2p\sqrt{1-p^2} - 1$	<ul style="list-style-type: none"> ✓ $x = \sqrt{1-p^2}$ ✓ double angle/dubbelhoek ✓ substitution/substitusie ✓ answer/antwoord <p style="text-align: right;">(4)</p>
5.4	$\frac{3 \sin x + 2(2 \sin x \cos x)}{2 + 3 \cos x + 2(2 \cos^2 x - 1)}$ $= \frac{\sin x \cdot (3 + 4 \cos x)}{4 \cos^2 x + 3 \cos x}$ $= \frac{\sin x \cdot (3 + 4 \cos x)}{\cos x \cdot (4 \cos x + 3)}$ $= \tan x$	<ul style="list-style-type: none"> ✓ $2 \sin x \cos x$ ✓ $2 \cos^2 x - 1$ ✓ $\sin x (3 + 4 \cos x)$ ✓ $\cos x (4 \cos x + 3)$ <p style="text-align: right;">(4)</p>



5.5	$\frac{\sin x + \cos x}{\sin x - \cos x}$ $= \frac{\frac{\sin x}{\cos x} + \frac{\cos x}{\cos x}}{\frac{\sin x}{\cos x} - \frac{\cos x}{\cos x}}$ $= \frac{\tan x + 1}{\tan x - 1}$ $= \frac{\frac{p}{t} + 1}{\frac{p}{t} - 1}$ $= \frac{p+t}{t} \div \frac{p-t}{t}$ $= \frac{p+t}{t} \times \frac{t}{p-t}$ $= \frac{p+t}{p-t}$	<p>✓ divide numerator and denominator by $\cos x$/deel noemer en teller met $\cos x$</p> <p>✓ $\frac{\tan x + 1}{\tan x - 1}$</p> <p>✓ $\frac{\frac{p}{t} + 1}{\frac{p}{t} - 1}$</p> <p>✓ $\frac{p+t}{t} \div \frac{p-t}{t}$</p> <p>✓ $\frac{p+t}{t} \times \frac{t}{p-t}$</p> <p style="text-align: right;">(5)</p>
[23]		



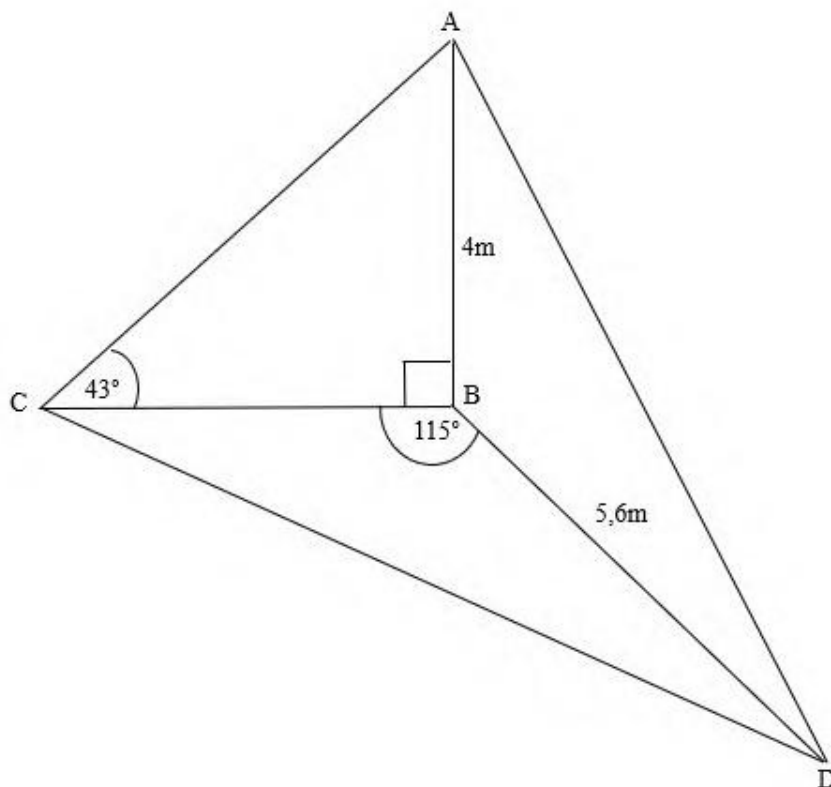
QUESTION/VRAAG 6

6.1	<p> ✓ turning points/draaipunte ✓ x-intercepts/x-afsnitte ✓ end points/eindpunte </p>	(3)
6.2.1	$\sin 2x = \cos(x - 45^\circ)$ $\sin 2x = \sin[90^\circ - (x - 45^\circ)]$ $\sin 2x = \sin(135^\circ - x)$ $2x = 135^\circ - x + k \cdot 360^\circ; k \in Z$ $3x = 135^\circ + k \cdot 360^\circ; k \in Z$ $x = 45^\circ + k \cdot 120^\circ; k \in Z$ <p>OR/OF</p> $2x = 180^\circ - (135^\circ - x) + k \cdot 360^\circ; k \in Z$ $2x = 45^\circ + x + k \cdot 360^\circ; k \in Z$ $x = 45^\circ + k \cdot 360^\circ; k \in Z$ $x \in \{45^\circ; 165^\circ\}$ <p>OR/OF</p> $\sin 2x = \cos(x - 45^\circ)$ $\cos(90^\circ - 2x) = \cos(x - 45^\circ)$ $90^\circ - 2x = x - 45^\circ + k \cdot 360^\circ; k \in Z$ $-3x = -135^\circ + k \cdot 360^\circ; k \in Z$ $x = 45^\circ + k \cdot 120^\circ; k \in Z$	$\checkmark \sin 2x = \sin[90^\circ - (x - 45^\circ)]$ $\checkmark 2x = 135^\circ - x + k \cdot 360^\circ; k \in Z$ $\checkmark x = 45^\circ + k \cdot 120^\circ; k \in Z$ $\checkmark 2x = 180^\circ - (135^\circ - x) + k \cdot 360^\circ;$ $k \in Z$ $x = 45^\circ + k \cdot 360^\circ;$ $\checkmark k \in Z$ $\checkmark x = 45^\circ$ $\checkmark x = 165^\circ$ <p>(7)</p> $\checkmark \cos(90^\circ - 2x) = \cos(x - 45^\circ)$ $\checkmark -3x = -135^\circ + k \cdot 360^\circ; k \in Z$ $\checkmark x = 45^\circ + k \cdot 120^\circ; k \in Z$ $\checkmark 90^\circ - 2x = 360^\circ - (x - 45^\circ) +$ $k \cdot 360^\circ; k \in Z$ $x = -315^\circ + k \cdot 360^\circ;$ $\checkmark k \in Z$ $\checkmark x = 45^\circ$ $\checkmark x = 165^\circ$ <p>(7)</p>



	OR/OF $90^\circ - 2x = 360^\circ - (x - 45^\circ) + k \cdot 360^\circ; k \in Z$ $90^\circ - 2x = 360^\circ - x + 45^\circ + k \cdot 360^\circ; k \in Z$ $-x = 315^\circ + k \cdot 360^\circ; k \in Z$ $x = -315^\circ + k \cdot 360^\circ; k \in Z$ $x \in \{45^\circ; 165^\circ\}$	(7)
6.2.2	$x \in \{15^\circ; 135^\circ\}$	$\checkmark x = 15^\circ$ $\checkmark x = 135^\circ$
6.2.3	$x \in (165^\circ; 180^\circ)$	(2)
	OR/OF $165^\circ < x < 180^\circ$	$\checkmark\checkmark$ critical values & notation/ <i>kritiese waardes en notasie</i>
6.3	360°	\checkmark answer/ <i>antwoord</i> (1)
6.4	$\sqrt{2} \sin 2x = \cos x + \sin x$ $\sin 2x = \frac{\cos x + \sin x}{\sqrt{2}}$ $\sin 2x = \frac{1}{\sqrt{2}} \cos x + \frac{1}{\sqrt{2}} \sin x$ $\sin 2x = \cos x \cos 45^\circ + \sin x \sin 45^\circ$ $\sin 2x = \cos (x - 45^\circ)$ $f(x) = g(x)$	$\checkmark \sin 2x = \frac{\cos x + \sin x}{\sqrt{2}}$ $\checkmark \sin 2x = \frac{1}{\sqrt{2}} \cos x + \frac{1}{\sqrt{2}} \sin x$ $\checkmark \sin 2x = \cos x \cos 45^\circ + \sin x \sin 45^\circ$
		(3)
		[18]



QUESTION/VRAAG 7

7.1	$\tan 43^\circ = \frac{4}{CB}$ $CB = \frac{4}{\tan 43^\circ}$ $= 4,29 \text{ m}$ <p>OR/OF</p> $\frac{CB}{\sin 47^\circ} = \frac{4}{\sin 43^\circ}$ $CB = \frac{4 \sin 47^\circ}{\sin 43^\circ}$ $= 4,29 \text{ m}$	<ul style="list-style-type: none"> ✓ substitution into the correct formula/<i>substitusie in korrek formule</i> ✓ CB subject of formula ✓ answer/<i>antwoord</i> (3) <ul style="list-style-type: none"> ✓ substitution into the correct formula/<i>substitusie in korrek formule</i> ✓ CB subject of formula ✓ answer/<i>antwoord</i> (3)
-----	---	--



7.2	$CD^2 = CB^2 + BD^2 - 2CB \cdot BD \cdot \cos 115^\circ$ $= (4,29)^2 + (5,6)^2 - 2(4,29)(5,6) \cos 115^\circ$ $= 70,07006$ $CD = 8,37 \text{ m}$	<ul style="list-style-type: none"> ✓ substitution into correct formula/substitusie in korrekte formule ✓ simplification/vereenvoudig ✓ answer/antwoord (3)
7.3	$\text{Area } \Delta BCD = \frac{1}{2} CB \cdot BD \cdot \sin B$ $= \frac{1}{2} (4,29)(5,6) \sin 115^\circ$ $= 10,89m^2$	<ul style="list-style-type: none"> ✓ formula/formule ✓ substitution into correct formula/substitusie in korrekte formule ✓ answer/antwoord (3)
		[9]



GEOMETRY/MEETKUNDE

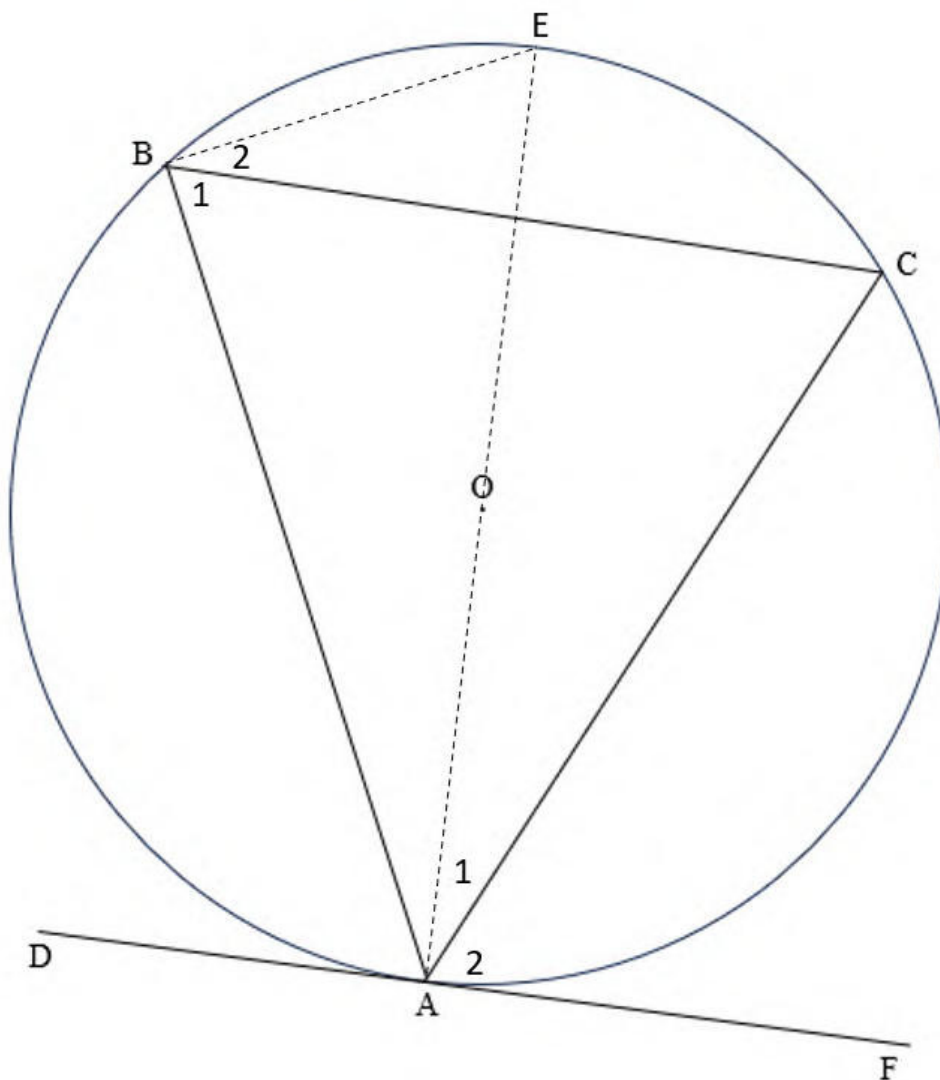
Please read carefully through the following table before marking **QUESTION 8–10/**

*Lees asseblief sorgvuldig deur die volgende tabel alvorens **VRAAG 8–10** nagesien word.*


	<p>The order in which the candidate answers a geometry question must follow logically/<i>Die volgorde waarin 'n kandidaat 'n meetkundevraag beantwoord moet logies volg.</i></p> <p>Example/Voorbeeld</p> <p>Given/<i>Gegee</i> $AB \parallel CD$ and/<i>en</i> $\widehat{EFD} = 115^\circ$</p> <p>The candidate first needs to calculate x BEFORE he/she can calculate y/<i>Die kandidaat moet eerste vir x bereken VOORDAT hy/sy vir y kan bereken.</i></p>
S	A mark for a correct statement (A statement mark is independent of a reason)
	<i>'n Punt vir 'n korrekte bewering ('n Punt vir 'n bewering is onafhanklik van die rede)</i>
R	A mark for the correct reason (A reason mark may only be awarded if the statement is correct)
	<i>'n Punt vir 'n korrekte rede ('n Punt word slegs vir die rede toegeken as die bewering korrek is)</i>
S/R	Award a mark if the statement AND reason are both correct (Both MUST be correct to get one mark)
	<i>Ken 'n punt toe as die bewering EN rede beide korrek is (Beide MOET korrek wees om een punt te kry)</i>



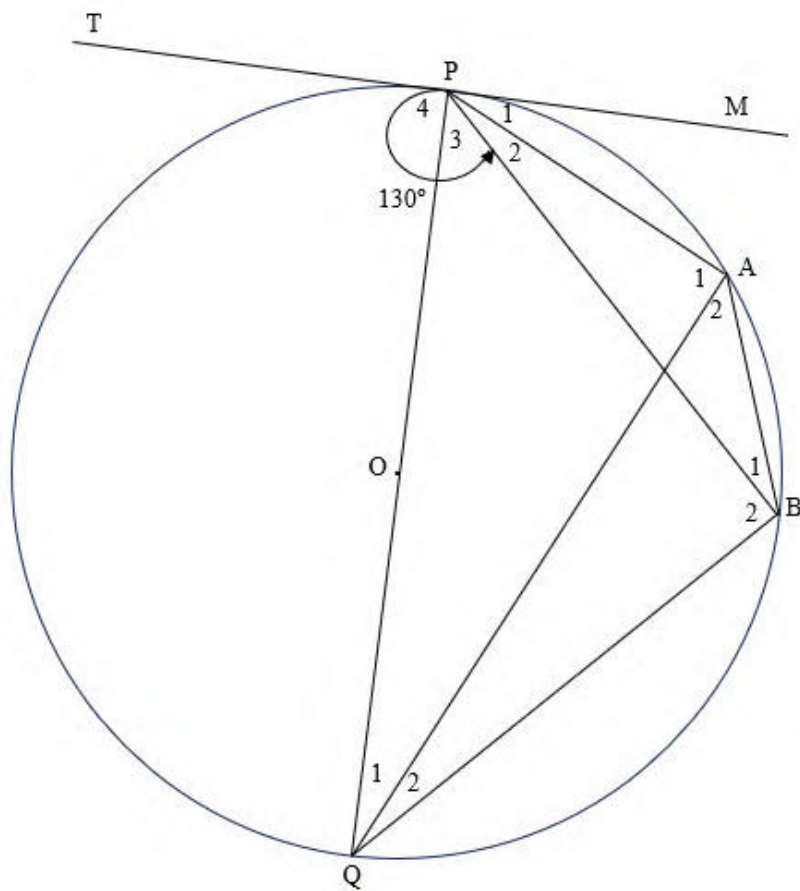
QUESTION/VRAAG 8



8.1	<p>Construction/Konstruksie: Draw AE through O and join BE/Trek AE deur O en verbind BE.</p> <p>$\hat{A}_1 + \hat{A}_2 = 90^\circ$ radius \perp tangent/radius \perp raaklyn</p> <p>$\hat{B}_1 + \hat{B}_2 = 90^\circ$ angles in a semi circle/hoeke in halfsirkel</p> <p>$\hat{A}_1 = \hat{B}_2$ subtended by the same arc/onderspan deur dieselfde boog</p> <p>$\hat{A}_2 = \hat{B}_1$</p>	<p>✓ constr./konstr.</p> <p>✓ S/R</p> <p>✓ S/R</p> <p>✓ S/R</p> <p>✓ S</p> <p>(5)</p>
-----	---	---



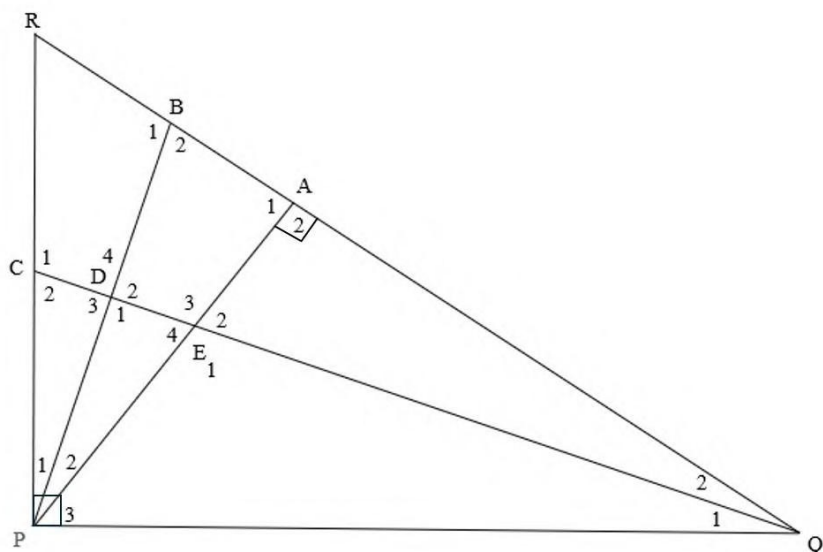
8.2



8.2.1	$\widehat{P}_4 = 90^\circ$ radius \perp tangent/radius \perp raaklyn $\widehat{P}_3 = 130^\circ - 90^\circ = 40^\circ$	\checkmark S \checkmark R \checkmark S (3)
8.2.2	$\widehat{B}_2 = 90^\circ$ angles in semi-circle/hoeke in halfsirkel $\widehat{Q}_1 + \widehat{Q}_2 = 50^\circ$ sum of interior angles of Δ /binnehoeke van Δ	\checkmark S \checkmark R \checkmark S/R (3)
8.2.3	$\widehat{PAB} = 130^\circ$ opp. angles of cyclic quad OR tan chord theorem/ teenoorst. hoek van koordevierhoek OF tan koordstelling	\checkmark S \checkmark R (2)
		[13]

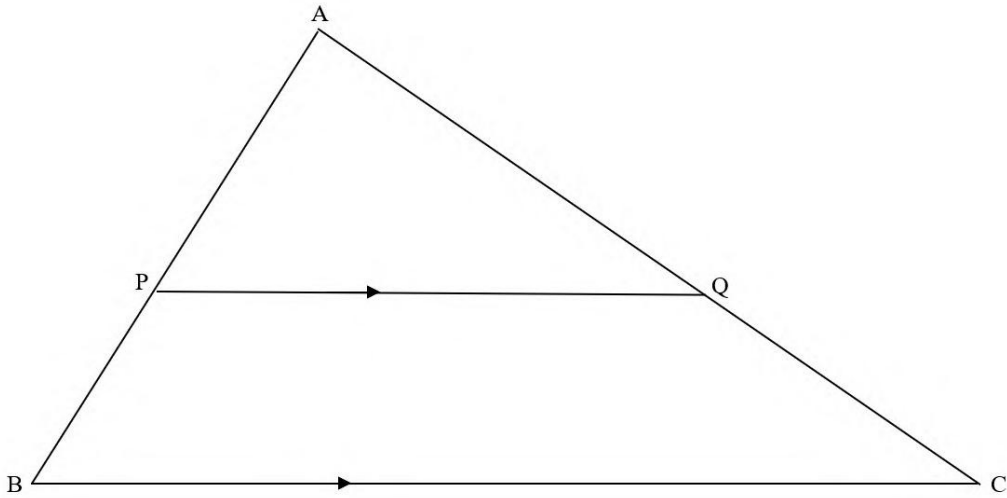


QUESTION/VRAAG 9



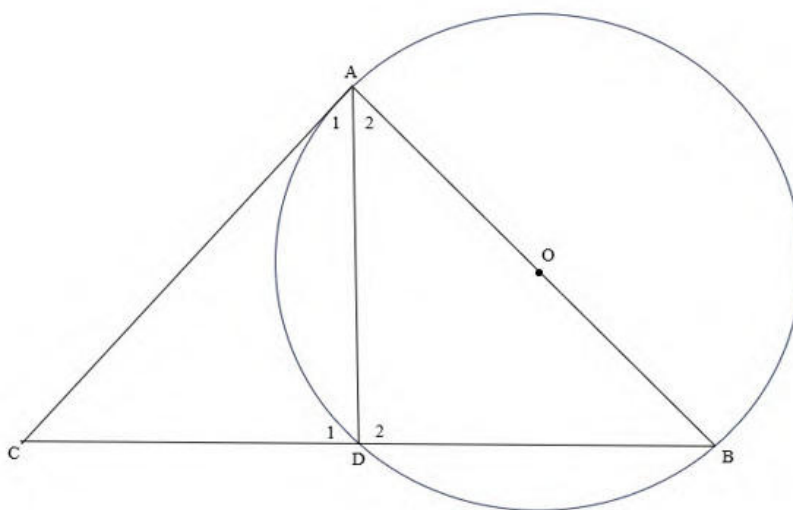
9.1.1	$P_1 + P_2 + P_3 = 90^\circ$ given/gegee $\widehat{Q}_1 + \widehat{Q}_2 + \widehat{P}_3 = 90^\circ$ sum int \angle 's of Δ /som van binne \angle 'e van Δ $\widehat{Q}_1 + \widehat{Q}_2 = \widehat{P}_1 + \widehat{P}_2$ $\widehat{Q}_1 = \widehat{Q}_2$ and $\widehat{P}_1 = \widehat{P}_2$ given/gegee $2\widehat{Q}_1 = 2\widehat{P}_2$ $\widehat{Q}_1 = \widehat{P}_2$ PB is a tangent angle between line and chord/hoek tussen lyn en koord	✓S/R ✓S/R ✓S ✓S ✓S ✓R	(6)
9.1.2	$\widehat{Q}_1 + \widehat{Q}_2 = \widehat{P}_1 + \widehat{P}_2$ given/gegee $2\widehat{Q}_2 = 2\widehat{P}_2$ $\widehat{Q}_2 = \widehat{P}_2$ ADPQ is a cyclic quad AD subtends equal \angle 's/AD onderspan gelyke \angle 'e	✓S/R ✓S ✓R	(3)



9.2		
9.2	$\frac{AP}{AB} = \frac{AQ}{AC} = \frac{PQ}{BC} = \frac{4}{7}$ <p style="text-align: center;">proportionality theorem $PQ \parallel BC$ / <i>eweredigheidsstelling $PQ \parallel BC$</i></p> $\frac{\text{Area } \triangle APQ}{\text{Area } \triangle ABC} = \frac{\frac{1}{2} AP \cdot AQ \cdot \sin A}{\frac{1}{2} AB \cdot AC \cdot \sin A}$ $= \frac{AP \cdot AQ}{AB \cdot AC}$ $= \frac{4 \cdot 4}{7 \cdot 7}$ $= \frac{16}{49}$	<p>✓S✓R</p> <p>✓ correct formula/korrekte formule</p> <p>✓ substitution/substitusie</p> <p>✓ answer/antwoord</p> <p style="text-align: right;">(5)</p> <p style="text-align: right;">[14]</p>



QUESTION/VRAAG 10



<p>10.1</p>	<p>$\widehat{D}_2 = 90^\circ$ angle in semi-circle/<i>hoek in halfsirkel</i> In $\triangle ADC$ and $\triangle BDA$ $\widehat{A}_1 = \widehat{B}$ tan chord theorem/<i>tankoord stelling</i> $\widehat{D}_1 = \widehat{D}_2 = 90^\circ$ angles on str. line/<i>hoeke op reguitlyn</i> $\widehat{C} = \widehat{A}_2$ sum of int \angle's of \triangle/<i>som van binne\angle'e van \triangle</i> $\triangle ADC \text{ /// } \triangle BDA$ [$\angle\angle\angle$] $\frac{AD}{BD} = \frac{DC}{DA} = \frac{AC}{BA}$ similar \triangle's/<i>gelykvormige \triangle'e</i> $AD^2 = BD \cdot DC$ $= 3x \cdot 2x$ $= 6x^2$</p>	<p>✓S/R ✓S/R ✓S/R ✓S ✓S/R ✓S (6)</p>
<p>10.2</p>	<p>$\widehat{A}_1 + \widehat{A}_2 = 90^\circ$ radius \perp tangent/<i>radius \perp raaklyn</i> $CB^2 = AC^2 + AB^2$ pythagoras' theorem/<i>stelling</i> $(5x)^2 = AC^2 + AB^2$ $25x^2 = AC^2 + AB^2$ $AC^2 + AB^2 + AD^2$ $= 25x^2 + 6x^2$ $= 31x^2$ $\sqrt{AC^2 + AB^2 + AD^2} = \sqrt{31x^2}$ $= x\sqrt{31}$</p>	<p>✓S ✓S ✓Simplify/ <i>vereenv</i> ✓S (4)</p>
		<p>[10]</p>

TOTAL/TOTAAL: 150

