

SA's Leading Past Year

Exam Paper Portal



You have Downloaded, yet Another Great Resource to assist you with your Studies 😊

Thank You for Supporting SA Exam Papers

Your Leading Past Year Exam Paper Resource Portal

Visit us @ www.saexampapers.co.za



MAAK ASSEBLIEF HIERDIE ADDENDUM VAN 5 BLADSYE LOS.



basic education

Department:
Basic Education
REPUBLIC OF SOUTH AFRICA

**NASIONALE
SENIOR SERTIFIKAAT**

GRAAD 12

WISKUNDIGE GELETTERDHEID V2

ADDENDUM

NOVEMBER 2023

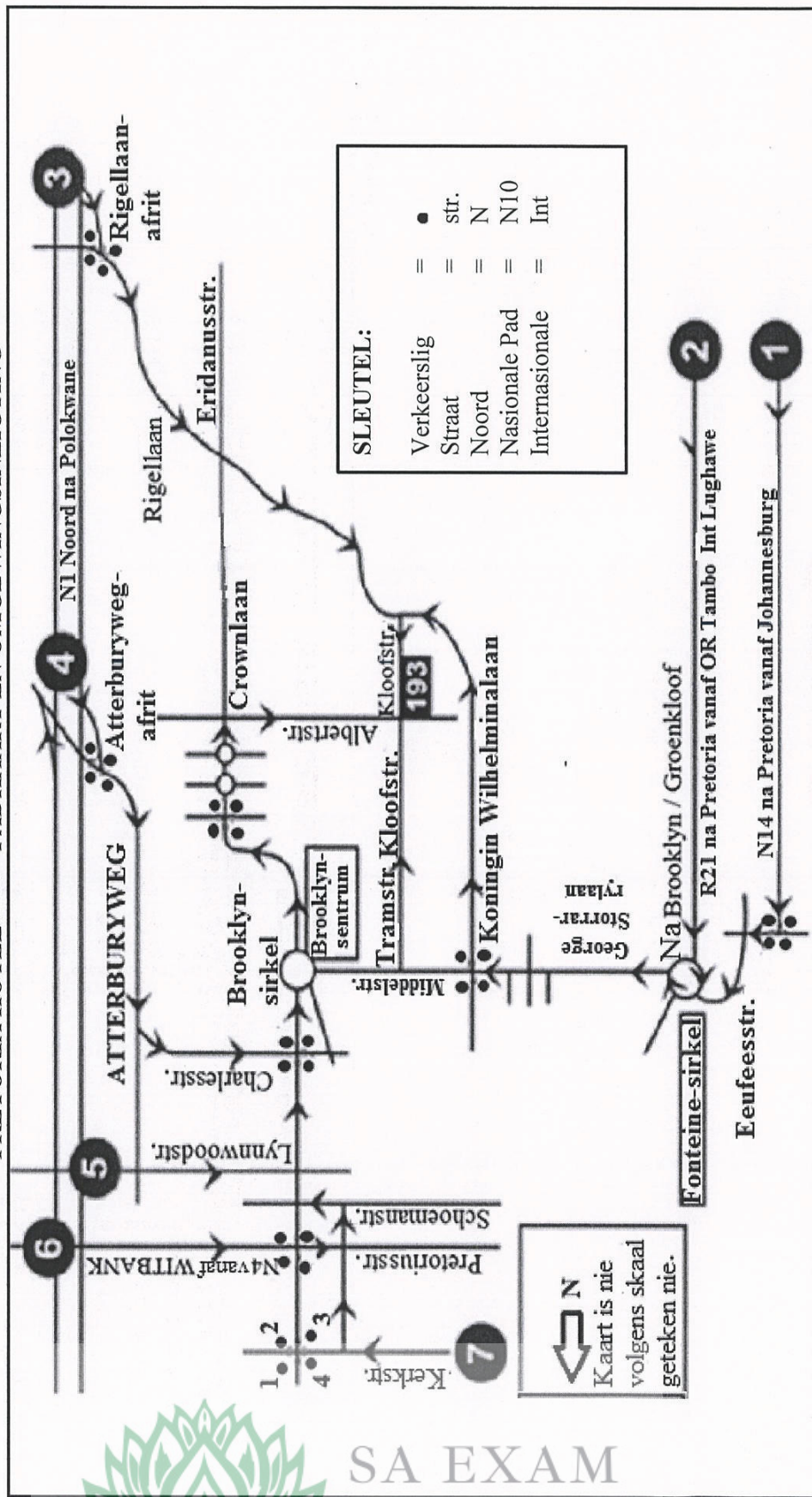
Hierdie addendum bestaan uit 5 bladsye met 4 bylaes.



BYLAE A

VRAAG 2.3

PRETORIA HOTEL 193 – PADKAART EN OMGEWINGSINLICHTING



[Bron: www.cricklewood.co.za]

Kopiereg voorbehou

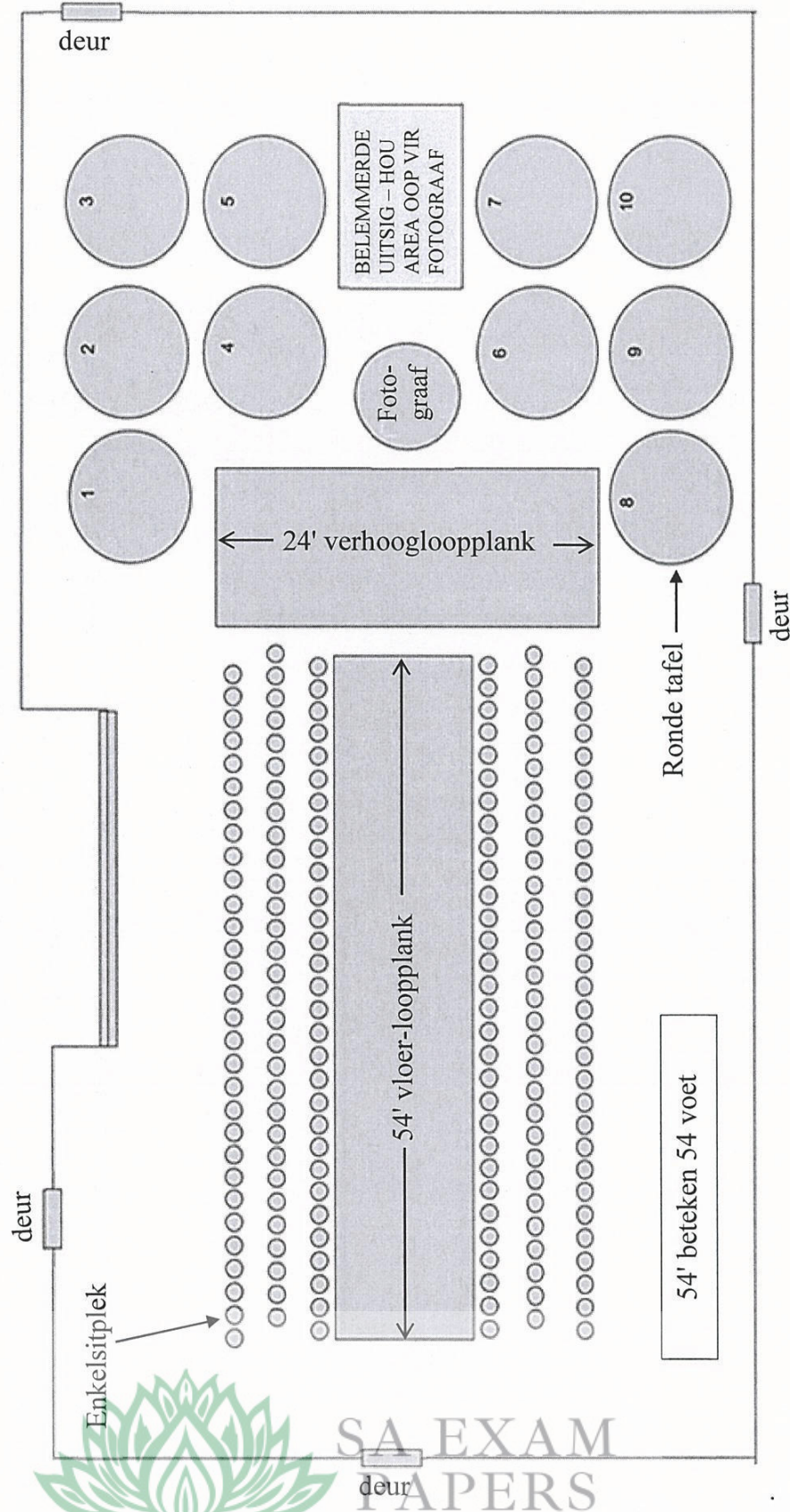


Blaai om asseblief

BYLAE B

VRAAG 4.1

UITLEG VAN DIE LOOPPLANKE EN DIE SITPLEKRANGSKIKKINGS BY 'N MODEPARADE



[Aangepas uit <https://fearlessfocusprogram.com/celebration-fashion-show-tickets/>]

BYLAE C**VRAAG 4.2****TABEL 1: LIGGAAMSTIPE-KAART WAT GEBRUIK WORD OM ROKGROOTTE TE KIES**

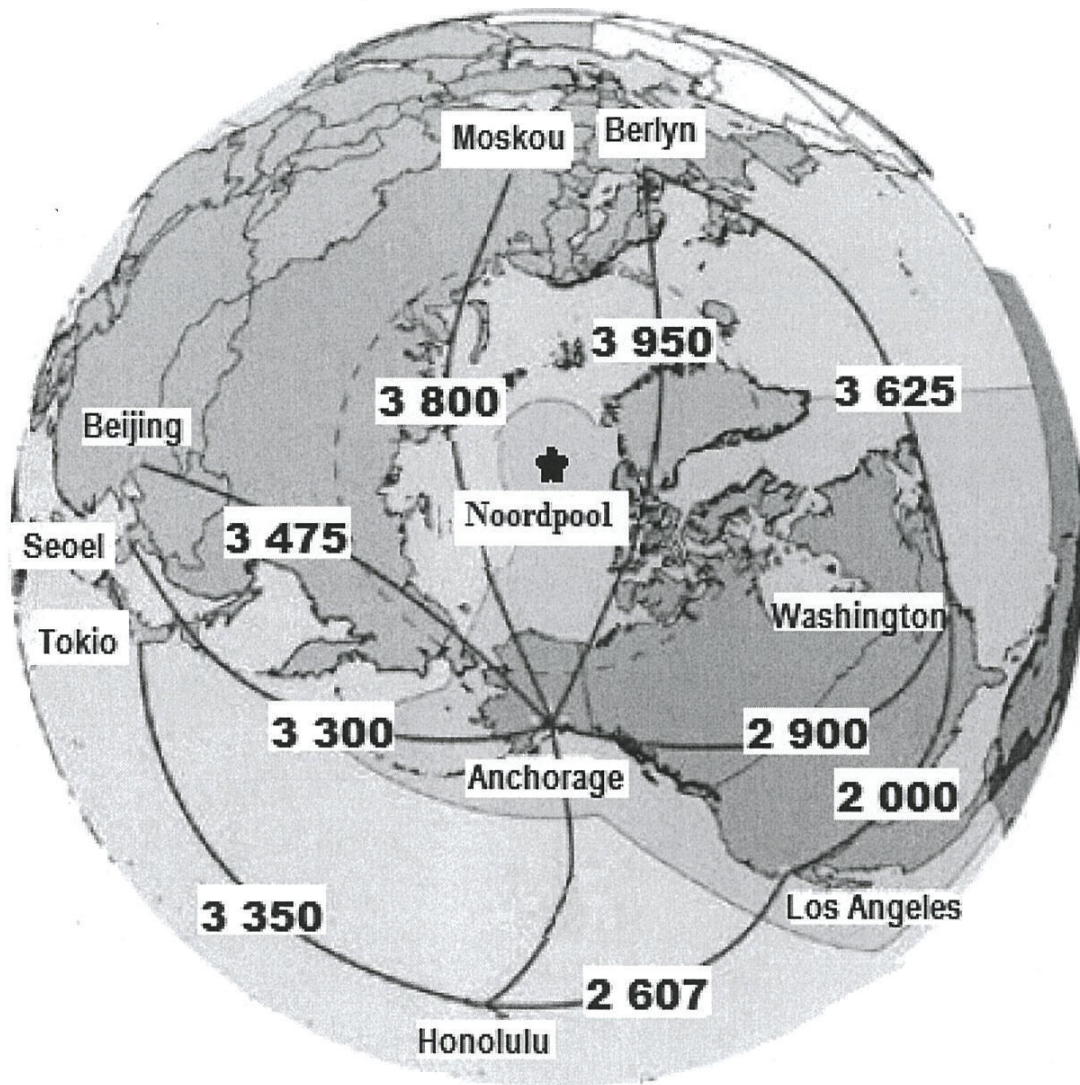
LIGGAAMSTIPE-KAART													
Massa →	50 kg	55 kg	60 kg	65 kg	67 kg	70 kg	75 kg	80 kg	85 kg	90 kg	100 kg		
Hoogte ↓													
1,50 m	XS	S	S	M	L	L	XL	XL	XL	XL	XXL		
1,55 m	XS	XS	S	M	M	L	L	XL	XL	XL	XXL		
1,60 m	XS	XS	S	S	M	L	L	L	XL	XL	XXL		
1,65 m	XS	XS	S	S	M	L	L	L	XL	XL	XXL		
1,70 m	XS	XS	S	S	M	M	L	L	XL	XL	XXL		
1,75 m	XS	XS	XS	S	S	M	M	L	XL	XL	XXL		
Rokgrootte	0-2	2-4	4-6	6-8	8-10	10-12	12-14	14-16	16-18	18-20	20-22		
Liggaamsgrootte	XS	XS	S	S	M	M	M	L	L	XL	XXL		

[Aangepas uit <https://cmmodels.com/model-measurements-for-catwalks-and-fashion-shows/>]

BYLAE D

VRAAG 5.3

GEDEELTE VAN DIE AARDBOL WAT DIE KORTSTE AFSTANDE, IN SEEMYL, TUSSEN ANCHORAGE EN 'N PAAR UITGESOEKTE STEDE IN DIE WÊRELD AANDUI

[Aangepas uit anchorage.net]