

SA's Leading Past Year

Exam Paper Portal



You have Downloaded, yet Another Great Resource to assist you with your Studies 😊

Thank You for Supporting SA Exam Papers

Your Leading Past Year Exam Paper Resource Portal

Visit us @ www.saexampapers.co.za





education
MPUMALANGA PROVINCE
REPUBLIC OF SOUTH AFRICA

**NATIONAL
SENIOR CERTIFICATE**

GRADE 12

**MATHEMATICAL LITERACY P2
SEPTEMBER 2023
ADDENDUM**

This addendum consists of 5 pages with 4 annexures.

MDE/September 2023

ANNEXURE A : ROUTE MAP OF TWO OCEANS MARATHON

QUESTION 2.1





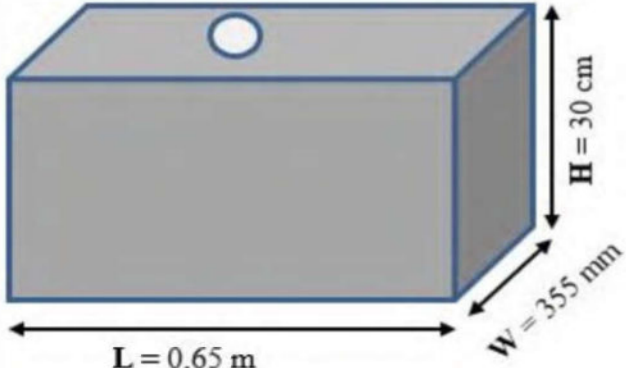
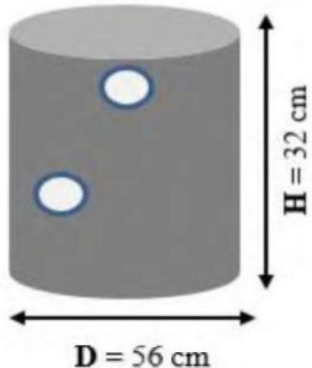
Copyright reserved

MDE/September 2023

ANNEXURE B

QUESTION 3.1

THE PICTURES AND DIAGRAMS WITH DIMENSIONS OF RECTANGULAR AND CYLINDRICAL FUEL TANKS MODELS

DIAGRAM OF RECTANGULAR PRISM FUEL TANK	DIAGRAM OF CYLINDRICAL FUEL TANK.
	
DIMENSIONS OF A RECTANGULAR PRISM FUEL TANK	DIMENSIONS OF A CYLINDRICAL FUEL TANK
 <p>Where L = length W = width and H = height</p>	 <p>Where D = diameter and H = height</p> <p>[Source: adapted from classicindustries.com]</p>

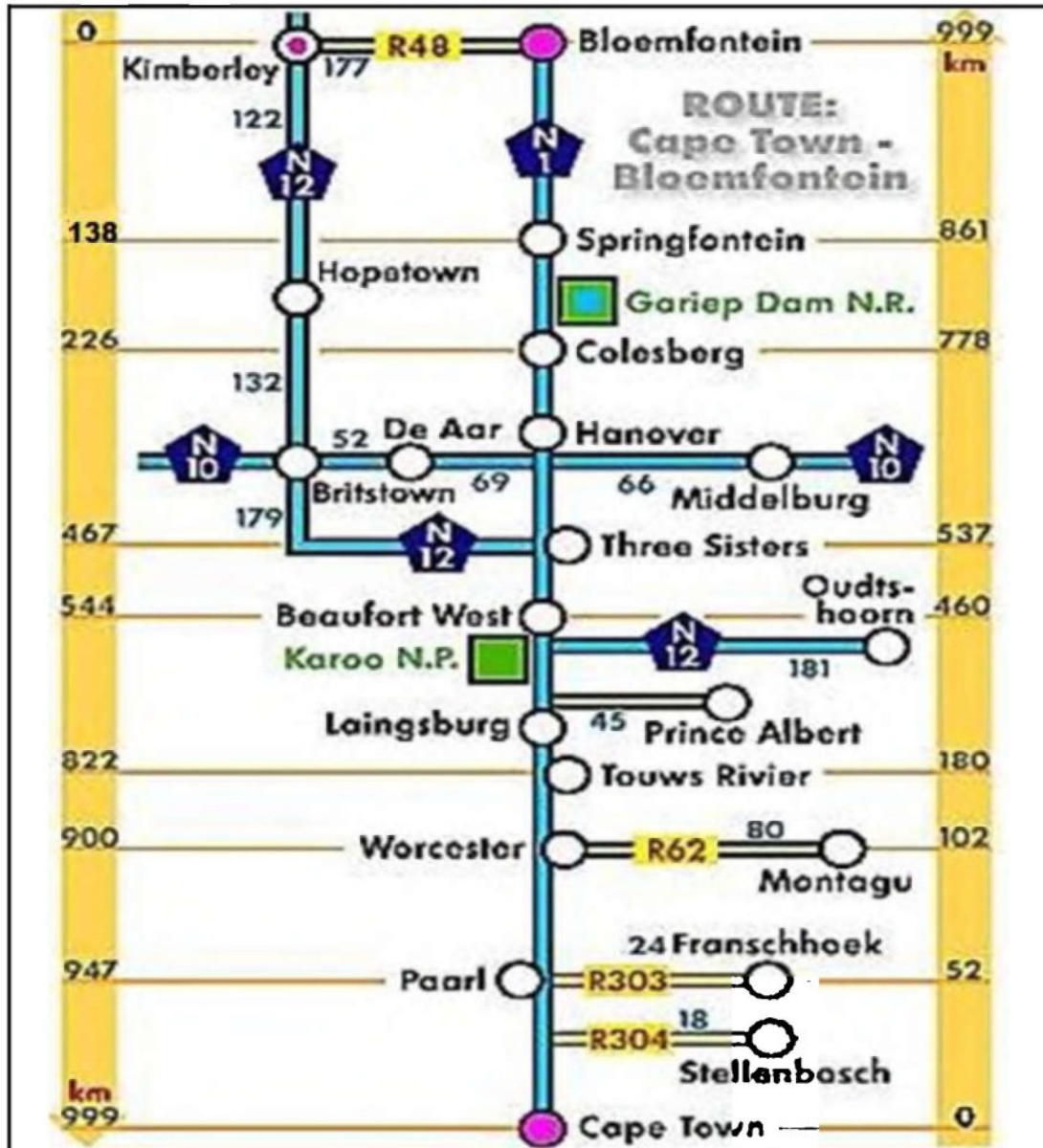
NOTE: 1 litre = 1000 cm³

Copyright reserved

ANNEXURE C

QUESTION 4.1

STRIP MAP SHOWING DISTANCES AND TOWNS BETWEEN CAPE TOWN AND BLOEMFONTEIN.



[Source: www.pinterest.com]

ANNEXURE D

QUESTION 4.2

FLOOR AND ELEVATION PLAN OF A HOUSE.



[Source: www.pinterest.com]

NOTE:

- The front of the house is facing north.
- All measurements are in meters.

- Door =

Copyright reserved