

SA's Leading Past Year

Exam Paper Portal

STUDY

You have Downloaded, yet Another Great Resource to assist you with your Studies 😊

Thank You for Supporting SA Exam Papers

Your Leading Past Year Exam Paper Resource Portal

Visit us @ [www.saexampapers.co.za](http://www.saexampapers.co.za)



SA EXAM  
PAPERS



# basic education

---

Department:  
Basic Education  
**REPUBLIC OF SOUTH AFRICA**

## SENIOR CERTIFICATE EXAMINATIONS/ NATIONAL SENIOR CERTIFICATE EXAMINATIONS

**MATHEMATICAL LITERACY P2**

**ADDENDUM**

**2023**


**This addendum consists of 4 pages with 3 annexures.**



ANNEXURE A

QUESTION 1.2

LAYOUT OF A VEGETABLE GARDEN WITH DIFFERENT PLANT BEDS



Plant bed number	Plant type
1	Sage
2	Marigold
3	Tomatoes/Rocket and other greens
4	Onions
5	Potatoes
6	Cabbages
7	Okra/Tomatoes
8	Kale
9	Peas

TABLE 2: PLANTS WITH THEIR PARTNER PLANTS<sup>1</sup>



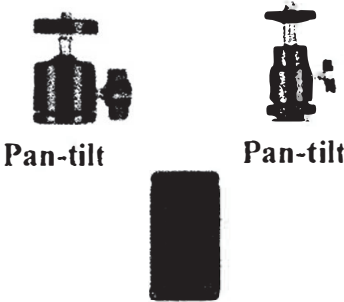






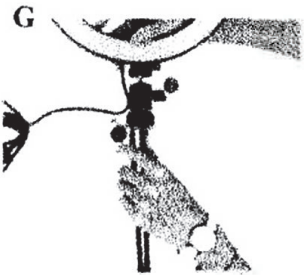


PLANT	PARTNER PLANTS					
Lettuce	Mint	Chives	Dill	Beans	Beetroot	Onions
Potatoes	Corn	Cabbage	Peas	Squash	Beans	
Onions	Carrots	Parsnip	Lettuce	Cabbage	Beetroot	Tomatoes
Squash	Corn	Peas	Radish	Dill	Beans	
Cucumber	Corn	Cabbage	Beans	Radish	Celery	Lettuce

<sup>1</sup>Partner plants are plants that grow well when planted next to each other.



ANNEXURE B

QUESTION 2.1

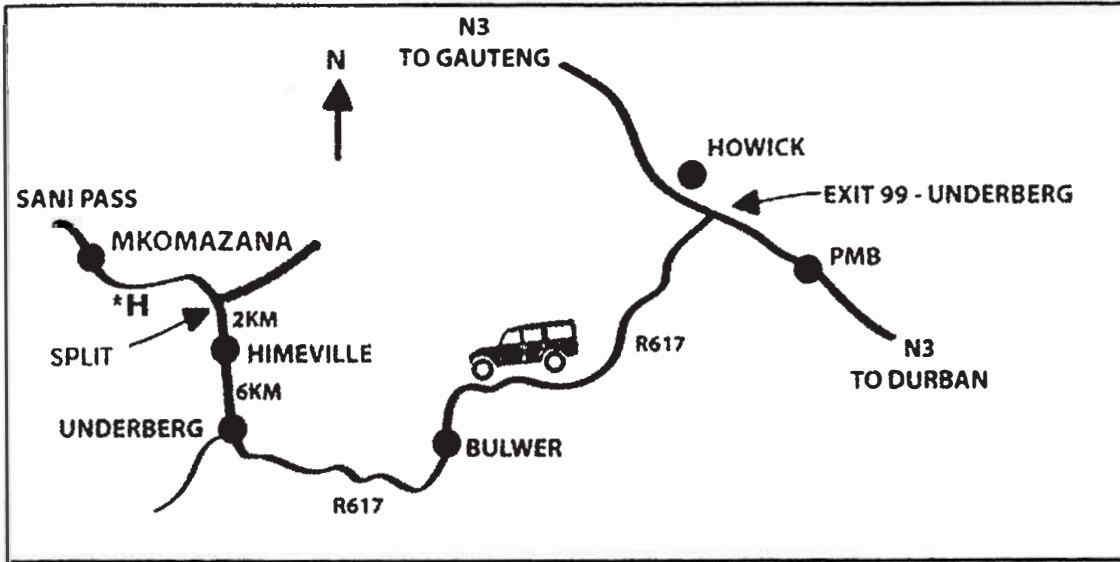
ITEM LIST		
 <b>Ring light</b>	 <b>Tripod</b>	 <b>Pan-tilt</b> <b>Pan-tilt</b> <b>Cellphone holder</b>
ASSEMBLY INSTRUCTIONS		
<b>A</b>  Prepare the pan-tilt and the cellphone holder.	<b>B</b>  Install the cellphone holder on the pan-tilt. Tighten it, as shown, in the direction of the arrow.	<b>C</b>  Loosen the bottom screw and leave a gap for easy installation on the ring light.
<b>D</b>  Mount the assembled cellphone holder on the ring of the ring light.	<b>E</b>  Press the clamp with your finger and rotate until tightened, as shown above.	<b>F</b>  ?
<b>G</b>  ?	<b>H</b>  ?	<b>I</b>  Completed assembly



ANNEXURE C

QUESTION 5

ROUTE MAP TO MKOMAZANA



[Source: [mkomazana.co.za](http://mkomazana.co.za)]

ROUTE MAP FROM JOHANNESBURG (A) TO DURBAN (B)

