

SA's Leading Past Year

Exam Paper Portal

STUDY

You have Downloaded, yet Another Great Resource to assist you with your Studies 😊

Thank You for Supporting SA Exam Papers

Your Leading Past Year Exam Paper Resource Portal

Visit us @ www.saexampapers.co.za



SA EXAM
PAPERS

NOTE:

- If a candidate answers a question TWICE, only mark the FIRST attempt.
- If a candidate has crossed out an attempt of a question and not redone the question, mark the crossed out version.
- Consistent accuracy applies in ALL aspects of the marking memorandum.
- Assuming answers/values in order to solve a problem is NOT acceptable.

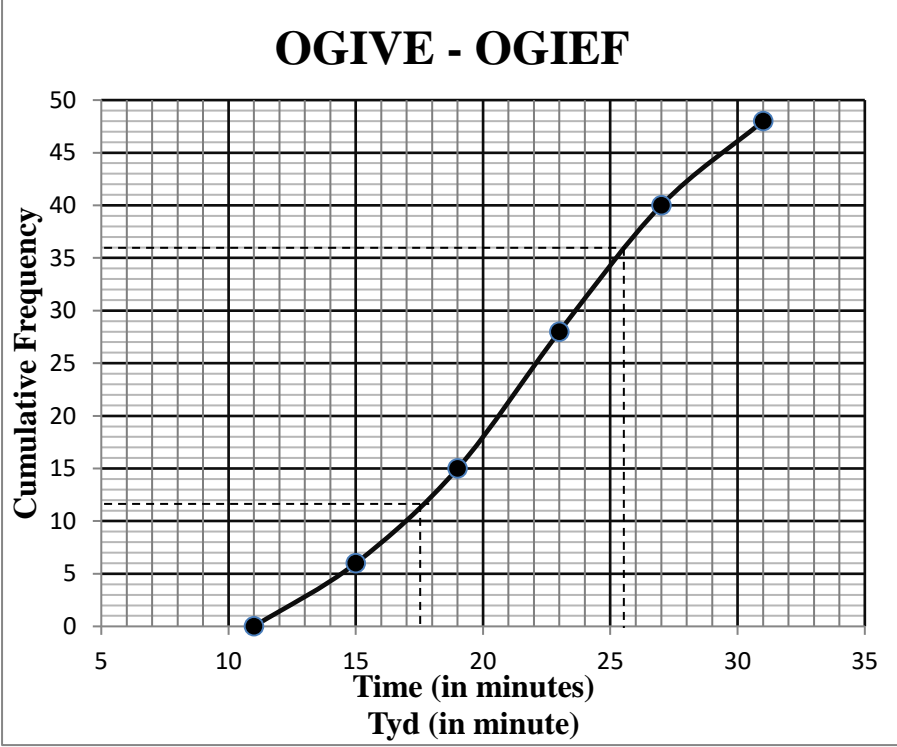
NOTA:

- As 'n kandidaat 'n vraag TWEEKEER beantwoord, merk slegs die EERSTE poging.
- As 'n kandidaat 'n poging om die vraag te beantwoord, doodgetrek het en nie dit oorgedoen het nie, merk die doodgetrekte poging.
- Volgehoue akkuraatheid word in ALLE aspekte van die nasienmemorandum toegepas.
- Aanvaarding van antwoorde/waardes om 'n probleem op te los, is ONaanvaarbaar.

VRAAG/QUESTION 1

1.1	$a = 16,16$ (16,1571639) $b = 0,88$ (0,8847043972) $\hat{y} = 16,16 + 0,88x$	answ only:full marks	✓ a ✓ b ✓ equation	(3)
1.2	$\hat{y} = 16,157... + 0,884...(73)$ $= 81\%$	answ only:full marks	✓ Subst into eq ✓ Answer (accept 80%)	(2)
1.3	$r = 0.92$ (0.9177373213)		✓ ✓ Answer (accept 0,91)	(2)
1.4	Yes./Ja The correlation between the two exams is very strong/ Die korrelasie tussen die twee eksamens is baie sterk..		✓ Yes ✓ correct justification	(2)
				[9]

QUESTION/ VRAAG 2

2.1	Modal Class: $19 \leq t < 23$	✓ ✓ answer	(1)
2.2	<p style="text-align: center;">OGIVE - OGIEF</p> 	<ul style="list-style-type: none"> ✓ grounding at (11;0) ✓ plotting upper limits ✓ plotting cumulative frequency ✓ drawing a smooth curve ✓ geanker by (11;0) ✓ plot boonste limiete ✓ plot kumulatiewe frekwensie ✓ gladde kurwe 	(4)
2.3	$Q_1 = 17,5$ (accept 17 – 18) $Q_3 = 25,5$ (accept 25 – 26) $IQR/IKO = 25,5 - 17,5$ $= 8$ (accept 7 – 9)	<ul style="list-style-type: none"> ✓ 17,5 ✓ 25,5 ✓ answer 	(3)
2.4	Read off from graph: 18 occasions $\therefore 48 - 18 = 30$ times <div style="border: 1px solid black; padding: 2px; display: inline-block; margin-left: 20px;">answ only:full marks</div>	<ul style="list-style-type: none"> ✓ accept 17 – 18 ✓ answer 	(2)
			[10]

QUESTION/ VRAAG 3

3.1	$m_{BC} = \frac{y_2 - y_1}{x_2 - x_1}$ $m_{BC} = \frac{0 + 8}{-5 - 1}$ $m_{BC} = \frac{8}{-6} = -\frac{4}{3}$	<ul style="list-style-type: none"> ✓ Substitution ✓ Answer 	(2)
3.2	$E = \left(\frac{x_2 + x_1}{2}; \frac{y_2 + y_1}{2} \right)$ $= \left(\frac{-5 + 1}{2}; \frac{0 + 8}{2} \right)$ $= (-2; -4)$	<ul style="list-style-type: none"> ✓ x value ✓ y value 	(2)
3.3	$m_{DE} = \frac{3}{4} \quad [DE \perp BC]$ $y - (-4) = \frac{3}{4}(x - (-2)) \quad \text{OR} \quad -4 = \frac{3}{4}(-2) + c$ $y = \frac{3}{4}x - 2\frac{1}{2}$	<ul style="list-style-type: none"> ✓ m_{DE} ✓ Substitute m_{DE} and $E(-2; -4)$ ✓ equation 	(3)
3.4	$\tan \theta = m_{AD}$ $\tan \theta = -\frac{4}{3}$ $\theta = 180^\circ - 53,13^\circ$ $= 126,87^\circ$	<ul style="list-style-type: none"> ✓ $\tan \theta = -\frac{4}{3}$ ✓ $53,13^\circ$ ✓ answer (obtuse) 	(3)
3.5	$\hat{O}FD = 126,87^\circ - 90^\circ \quad [\text{ext } \angle \text{ of } \Delta]$ $= 36,87^\circ$	<ul style="list-style-type: none"> ✓ method ✓ answer 	(2)
3.6	$(5\sqrt{2})^2 = (-5 - x)^2 + (0 - 7)^2$ $50 = (-5 - x)^2 + (0 - 7)^2$ $50 = x^2 + 10x + 25 + 49$ $x^2 + 10x + 24 = 0$ $(x + 6)(x + 4) = 0$ $x \neq -6 \text{ or } x = -4$	<ul style="list-style-type: none"> ✓ Subst into dist formula ✓ $AB^2 = 50$ ✓ standard form ✓ factors ✓ correct choice 	(5)
3.7	$(x - a)^2 + (y - b)^2 = r^2$ $(x - (-2))^2 + (y - (-4))^2 = (-5 - (-2))^2 + (0 - (-4))^2$ $(x + 2)^2 + (y + 4)^2 = (-5 + 2)^2 + (0 + 4)^2$ $(x + 2)^2 + (y + 4)^2 = 25$ <p>OR</p> $(x + 2)^2 + (y + 4)^2 = r^2$ $(-5 + 2)^2 + (0 + 4)^2 = r^2$ $(x + 2)^2 + (y + 4)^2 = 25$ <p>OR</p> $(x + 2)^2 + (y + 4)^2 = r^2$ $(1 + 2)^2 + (-8 + 4)^2 = r^2$	<ul style="list-style-type: none"> ✓ Subst LHS ✓ Subst RHS ✓ Answer ✓ Subst LHS ✓ Subst $(-5; 0)$ ✓ Answer ✓ Subst LHS ✓ Subst $(1; -8)$ 	(3)

	$(x+2)^2 + (y+4)^2 = 25$	✓ Answer	
			[20]

QUESTION/ VRAAG 4

4.1.1	$x^2 + y^2 + 4x - 4y - 12 = 0$ $(x+2)^2 + (y-2)^2 = 12 + 4 + 4 = 20$ M(-2 ; 2) OR $M\left(\frac{4}{-2}; \frac{-4}{-2}\right)$ M(-2 ; 2)	<div style="border: 1px solid black; padding: 2px; display: inline-block;">answ only:full marks</div>	✓ x value ✓ y value ✓ x value ✓ y value	(2)
4.1.2	$x^2 + 0^2 + 4x - 4(0) - 12 = 0$ $x^2 + 4x - 12 = 0$ $(x+6)(x-2) = 0$ $x \neq -6$ and $x = 2$, C(2 ; 0) OR $\frac{x_C - 6}{2} = -2$ $x_C = 2$ C(2 ; 0)	<div style="border: 1px solid black; padding: 2px; display: inline-block;">answ only:full marks</div>	✓ y- coordinate = 0 ✓ factors ✓ correct x value ✓ correct use of formula ✓ x value ✓ y = 0	(3)
4.2	$m_{MC} = -\frac{1}{2}$ $m_{\text{tangent}} = 2$ [tangent \perp diameter] $y - y_1 = m(x - x_1)$ $y - 4 = 2(x - (-6))$ $y = 2x + 16$		✓ S ✓ R ✓ substituting A(-6 ; 4) ✓ equation	(4)
4.3	B(x ; 0) $y = 2x + 16$ $\therefore 0 = 2x + 16$ $\therefore x = -8$ Area $\Delta ABC = \frac{1}{2} BC \times h$ $= \frac{1}{2} (10) \times 4$ $= 20$ sq units OR B(x ; 0) $y = 2x + 16$ $\therefore 0 = 2x + 16$ $\therefore x = -8$ $AB = \sqrt{(-6 + 8)^2 + (4 - 0)^2}$ $AB = \sqrt{20}$		✓ y = 0 in equation ✓ x_B ✓ BC = 10 ✓ h = 4 ✓ answer ✓ y = 0 in equation ✓ x_B	(5)

	$\begin{aligned} \text{Area of } \Delta &= \frac{1}{2}(\text{AB})(\text{AC}) \\ &= \frac{1}{2}(\sqrt{20})(2\sqrt{20}) \\ &= 20 \text{ unit}^2 \end{aligned}$	<ul style="list-style-type: none"> ✓ $\text{AB} = \sqrt{20}$ ✓ $\text{AC} = 2\text{radius} = 2\sqrt{20}$ ✓ answer 	
4.4	<p>Eq of tangent parallel to AB through C:</p> $y - y_1 = m(x - x_1)$ $y - 0 = 2(x - 2)$ $y = 2x - 4$ <p>$\therefore -4 < k < 16$</p> <p>OR</p> $x^2 + (2x + k)^2 + 4x - 4(2x + k) - 12 = 0$ $5x^2 + 4xk - 4x + k^2 - 4k - 12 = 0$ $5x^2 + (4k - 4)x + (k^2 - 4k - 12) = 0$ <p>$\therefore \Delta > 0$</p> $(4k - 4)^2 - 4(5)(k^2 - 4k - 12) > 0$ $-4k^2 + 64k + 256 > 0$ $k^2 - 16k - 64 > 0$ $(k - 16)(k + 4) > 0$ <p>$\therefore -4 < k < 16$</p>	<ul style="list-style-type: none"> ✓ subst C(2 ; 0) into equation ✓ eq of tangent through C ✓ -4 ✓ 16 ✓ between ✓ standard form ✓ $\Delta > 0$ ✓ -4 ✓ 16 ✓ between 	(5)
			[19]

QUESTION/ VRAAG 5

5.1.1	$\sin 149^\circ = \sin 31^\circ$ $= p$	<ul style="list-style-type: none"> ✓ reduction ✓ answer 	(2)
5.1.2	$\cos(-59^\circ) = \cos 59^\circ$ $= \sin 31^\circ$ $= p$	<ul style="list-style-type: none"> ✓ co-ratio ✓ answer 	(2)
5.1.3	$\cos 62^\circ = 1 - 2\sin^2 31^\circ$ $= 1 - 2p^2$	<ul style="list-style-type: none"> ✓ double formula ✓ answer in terms of p 	(2)
5.2	$(-\tan \theta)(\cos \theta)^2 + (-\cos \theta)(\sin \theta)$ $\left(-\frac{\sin \theta}{\cos \theta}\right)(\cos \theta)^2 - (\cos \theta)(\sin \theta)$ $-(\cos \theta)(\sin \theta) - (\cos \theta)(\sin \theta)$ $-2(\cos \theta)(\sin \theta)$ $= -\sin 2\theta$	<ul style="list-style-type: none"> ✓ $-\tan \theta$ ✓ $\cos \theta$ ✓ $-\cos \theta$ ✓ identity ✓ simplify and add ✓ answer 	(6)
5.3.1	$LHS = \frac{\sin 2x + \sin x}{\cos 2x + \cos x + 1}$ $= \frac{2 \sin x \cdot \cos x + \sin x}{2 \cos^2 x - 1 + \cos x + 1}$ $= \frac{\sin x (2 \cos x + 1)}{\sin x (2 \cos x + 1)}$ $= \frac{2 \cos^2 x + \cos x}{\cos x (2 \cos x + 1)}$ $= \frac{\sin x}{\cos x} = \tan x$ $= RHS$	<ul style="list-style-type: none"> ✓ expansion of $\sin 2x$ ✓ correct expansion of $\cos 2x$ ✓ simplify numerator ✓ factorize numerator & denominator ✓ Identity 	(5)
5.3.2	$\cos x (2 \cos x + 1) = 0 \text{ or } \tan x = \infty$ $x = 240^\circ \text{ or } 270^\circ$	<ul style="list-style-type: none"> ✓ 240° ✓ 270° 	(2)
			[19]

QUESTION/ VRAAG 6

6.1	$\sin(x + 30^\circ) = \cos 3x$ $= \sin(90^\circ - 3x)$ $x + 30^\circ = 90^\circ - 3x + k.360^\circ$ $4x = 60^\circ + k.360^\circ$ $x = 15^\circ + k.90^\circ$ <p>or</p> $x + 30^\circ = 180^\circ - (90^\circ - 3x) + k.360^\circ$ $-2x = 60^\circ + k.360^\circ$ $x = -30^\circ - k.180^\circ ; k \in Z$ <p>OR</p> $\sin(x + 30^\circ) = \cos 3x$ $\cos[90^\circ - (x + 30)] = \cos 3x$ $90^\circ - (x + 30^\circ) = 3x + k.360^\circ$ $-4x = -60^\circ + k.360^\circ$ $x = 15^\circ - k.90^\circ$ <p>or</p> $90^\circ - (x + 30^\circ) = 360^\circ - 3x + k.360^\circ$ $2x = 300^\circ + k.360^\circ$ $x = 150^\circ + k.180^\circ ; k \in Z$	✓ co-ratio ✓ equation ✓ general solution ✓ equation ✓ general solution ✓ $k \in Z$ ✓ co-ratio ✓ equation ✓ general solution ✓ equation ✓ general solution ✓ $k \in Z$	(6)
6.2.1		✓ max tp's ✓ min tp ✓ x intercepts	(3)
6.2.2	Period = 120°	✓ answer	(1)
6.2.3	$x \in [15^\circ ; 105^\circ]$ OR $15^\circ \leq x \leq 105^\circ$	✓ 15° ✓ 105° ✓ notation	(3)
			[13]

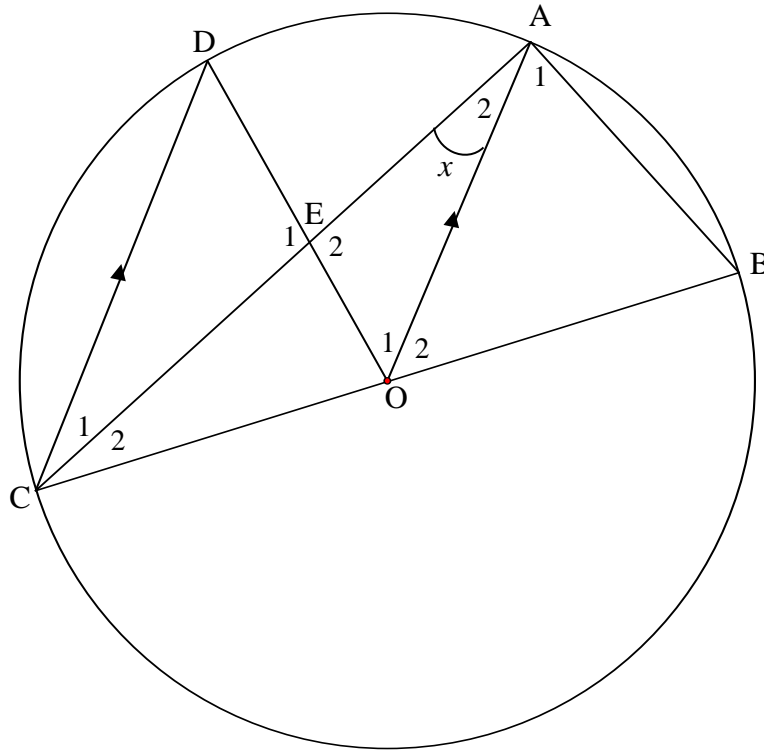
QUESTION 7

7.1	$\tan \alpha = \frac{AP}{AB}$ $AP = AB \tan \alpha$	<ul style="list-style-type: none"> ✓ correct ratio ✓ AP ito AB and α 	(2)
7.2	$\frac{AB}{\sin \beta} = \frac{20}{\sin(180^\circ - (\theta + \beta))}$ $\frac{AB}{\sin \beta} = \frac{20}{\sin(\theta + \beta)}$ $\therefore AB = \frac{20 \sin \beta}{\sin(\theta + \beta)}$ $\therefore AP = \frac{20 \cdot \sin \beta \cdot \tan \alpha}{\sin(\theta + \beta)}$	<ul style="list-style-type: none"> ✓ correct subst into sine rule ✓ reduction ✓ AB as subject and subst into 7.1 	(3)
7.3	$\theta = \beta$ [\angle s opp equal sides] $AP = \frac{20 \cdot \sin \beta \cdot \tan \alpha}{\sin 2\beta}$ $AP = \frac{20 \cdot \sin \beta \cdot \tan \alpha}{2 \sin \beta \cdot \cos \beta}$ $AP = \frac{10 \cdot \tan \alpha}{\cos \beta}$	<ul style="list-style-type: none"> ✓ replace θ ✓ expansion of $\sin 2\beta$ ✓ simplified answer 	(3)
			[8]

QUESTION/ VRAAG 8

8.1	Line from centre to midpt of chord OR Line from centre bisects chord	✓ reason	(1)
8.2	$\hat{B} = 43^\circ$ [\angle s in same segment]	✓S ✓R	(2)
8.3	$\hat{BAD} = 90^\circ$ [\angle in semi-circle] $= \hat{E}_1$	✓S ✓R	(2)
8.4	BD = 28 units $\therefore \cos 43^\circ = \frac{AB}{28}$ $\therefore AB = 28 \cos 43^\circ = 20,48$ units	<ul style="list-style-type: none"> ✓ correct ratio ✓ answer 	(2)
			[7]

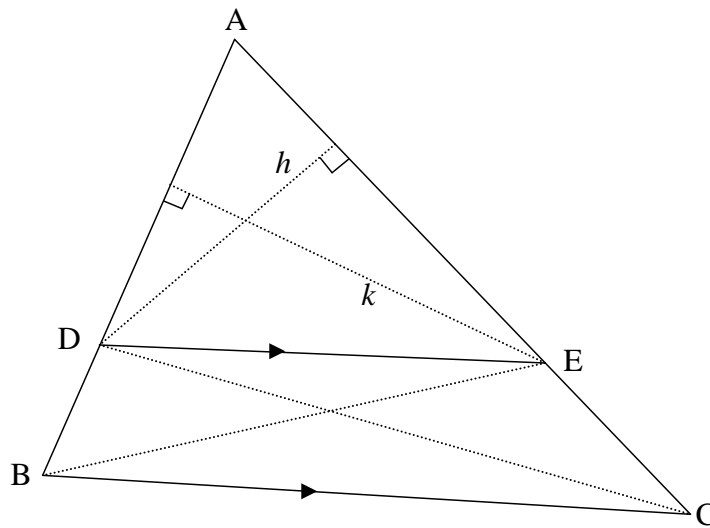
QUESTION/ VRAAG 9



9.1.1	verwys \angle e/alternate \angle s; $CD \parallel OA$	✓ R	(1)
9.1.2	$CO = OA$ [radii] \angle s opp equal sides/ \angle e to gelyke sye	✓ R	(1)
9.2.1	$\hat{C}AB = 90^\circ$ [\angle in semi-circle/halfsirkel] $\therefore \hat{A}_1 = 90^\circ - x$	✓ S ✓ R ✓ S	(3)
9.2.2	$\hat{O}_1 = 2x$ [\angle at centre = $2 \times \angle$ at circum/midpts $\angle = 2 \times$ omtr \angle]	✓ S ✓ R	(2)
9.2.3	$\hat{O}_2 = 2x$ [ext \angle of $\triangle ACO$] OR $\hat{O}_2 = 2x$ [\angle at centre = $2 \times \angle$ at circum/midpts $\angle = 2 \times$ omtr \angle] OR $\hat{A}_1 = 90^\circ - x = \hat{B}$ [\angle s opp equal sides/ \angle e to gelyke sye] $\therefore \hat{O}_2 = 180^\circ - 2(90^\circ - x) = 2x$ [\angle s of \triangle]	✓ S ✓ R ✓ S ✓ R ✓ R ✓ S	(2)
9.3	$\hat{E}OB = 4x$ [$\hat{O}_1 = 2x$ and $\hat{O}_2 = 2x$] $\hat{E}OB + \hat{E}AB = 180^\circ$ [opp \angle s of cyc quad supp/ to \angle e v kdvh suppl] $\therefore 4x + 90^\circ = 180^\circ$ $x = 22,5^\circ$	✓ R ✓ equation ✓ answer	(3)
			[12]

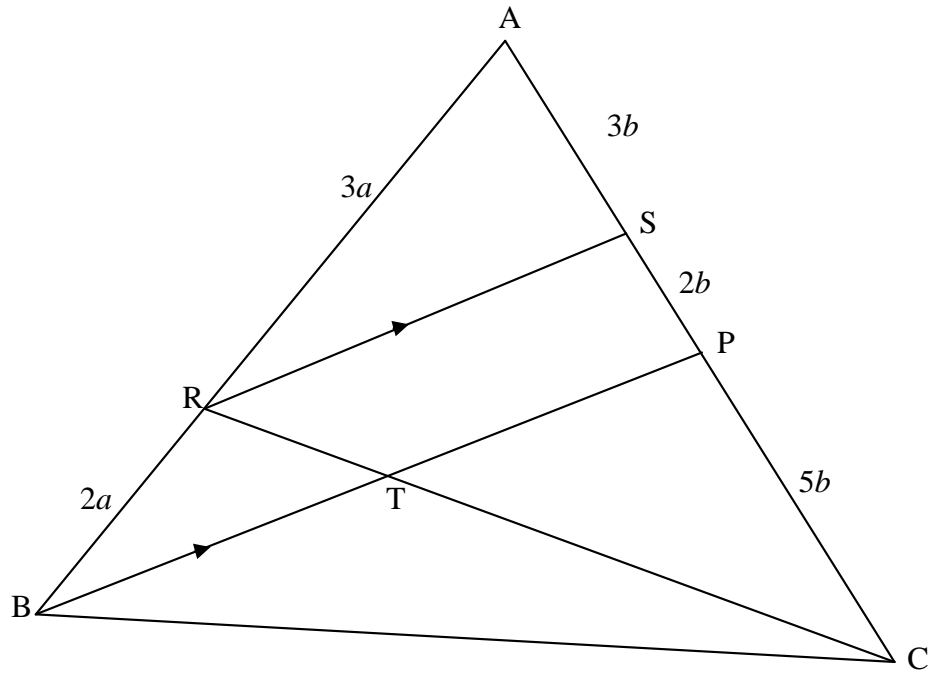
QUESTION/ VRAAG 11

11.1



<p>Construction: Connect DC and BE and draw the altitudes k and h</p> <p>Konstruksie: Verbind DC en BE en trek hoogtelyne k en h.</p>	<p>✓ constr/ konstr (on sketch or wording/ op skets of beskrywing)</p>	
$\frac{\text{Area } \triangle ADE}{\text{Area } \triangle BDE} = \frac{\frac{1}{2} \times AD \times k}{\frac{1}{2} \times BD \times k} = \frac{AD}{BD}$ $\frac{\text{Area } \triangle ADE}{\text{Area } \triangle DEC} = \frac{\frac{1}{2} \times AE \times h}{\frac{1}{2} \times EC \times h} = \frac{AE}{EC}$ <p>but/maar: Area $\triangle BDE$ = Area $\triangle DEC$ [DE common base and DE \parallel BC/ DE gemeensk basis en DE \parallel BC]</p> $\therefore \frac{\text{Area } \triangle ADE}{\text{Area } \triangle BDE} = \frac{\text{Area } \triangle ADE}{\text{Area } \triangle DEC}$ $\therefore \frac{AD}{BD} = \frac{AE}{EC}$	<p>✓S</p> <p>✓S</p> <p>✓S ✓R</p> <p>✓conclusion</p>	<p>(6)</p>

11.2



11.2.1	$\frac{AS}{SP} = \frac{AR}{RB}$ $= \frac{3}{2}$ $\frac{AS}{SC} = \frac{3}{7}$ <p>[line side of Δ OR RS BP] [AP = PC]</p>	<p>✓S ✓R</p> <p>✓ answer</p> <p>✓S</p>	(4)
11.2.2	$\frac{RT}{TC} = \frac{SP}{PC}$ $= \frac{2}{5}$ <p>[line side of Δ OR RS TP]</p>	<p>✓S ✓R</p> <p>✓ answer</p>	(3)
11.2.3	$\frac{\text{Area } \Delta TPC}{\text{Area } \Delta RSC} = \frac{\frac{1}{2} TC \cdot PC \cdot \sin \hat{C} P}{\frac{1}{2} RC \cdot SC \cdot \sin \hat{C} P}$ $= \frac{TC}{RC} \times \frac{PC}{SC}$ $= \frac{2}{7} \times \frac{5}{7}$ $= \frac{10}{49}$	<p>✓ Correct subst into area rule</p> <p>✓ $\frac{2}{7}$ ✓ $\frac{5}{7}$</p> <p>✓ answer</p>	(4)
			[17]

Total/Totaal: [150]